

Name: _____

Nickel and Dimed



Grocery store prices can be confusing. How can a person know what size of a product offers the most savings? Use division to find the per-ounce or per-unit price of each item. Circle the best bargain. Show your work in the space provided.



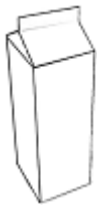
8 ounces
\$1.29



12 ounces
\$1.69



16 ounces
\$1.99



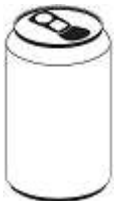
half-gallon
\$3.00



gallon
\$5.00



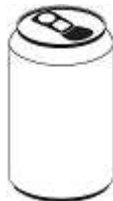
two gallons
\$8.00



single can
\$1.00



12-pack
\$4.99



case of 24
\$7.99