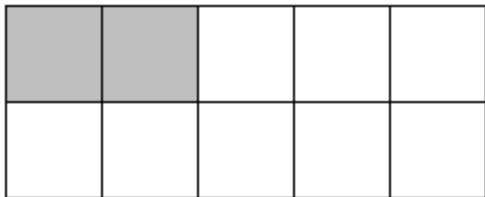


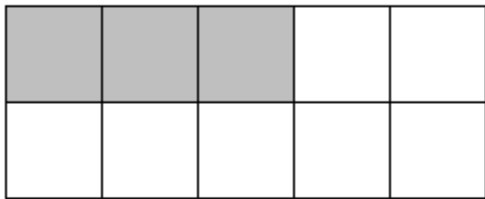
Name: \_\_\_\_\_

# Counting Shaded Boxes Worksheet #1

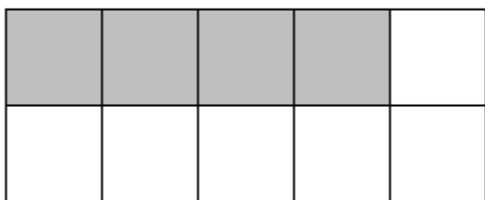
**Directions:** Look at each group of ten boxes. How many of the boxes are shaded? Write the number of shaded boxes on each line.



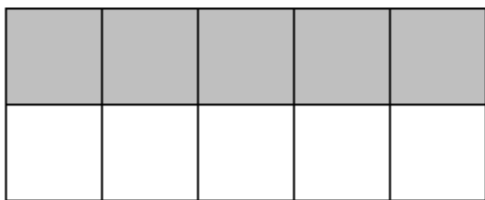
\_\_\_ out of 10 boxes are shaded.



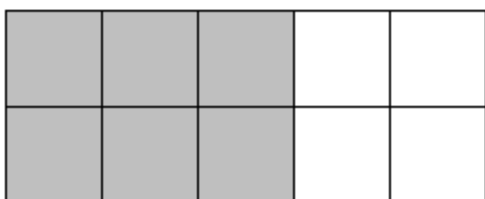
\_\_\_ out of 10 boxes are shaded.



\_\_\_ out of 10 boxes are shaded.



\_\_\_ out of 10 boxes are shaded.



\_\_\_ out of 10 boxes are shaded.