


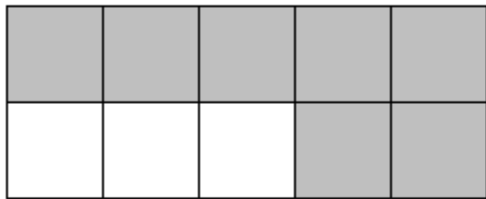
Name: _____

Counting Shaded Boxes Worksheet #2


Directions: Look at each group of ten boxes. How many of the boxes are shaded? Write the number of shaded boxes on each line.



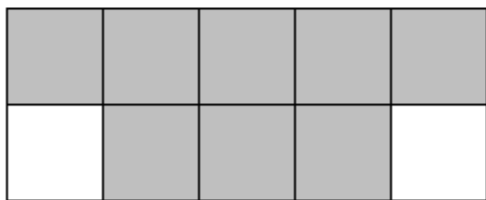
___ out of 10 boxes are shaded.




___ out of 10 boxes are shaded.



___ out of 10 boxes are shaded.



___ out of 10 boxes are shaded.



___ out of 10 boxes are shaded.