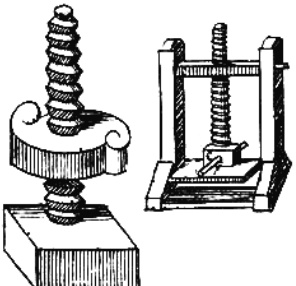
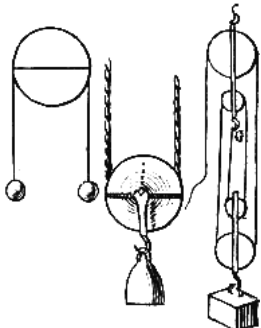
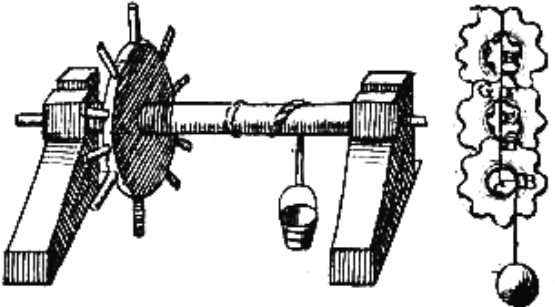
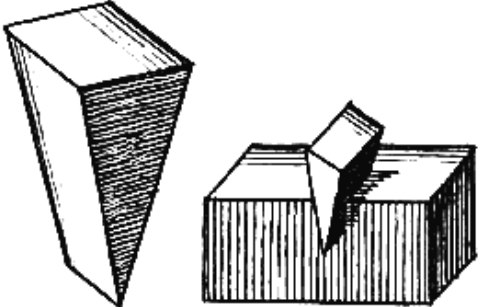
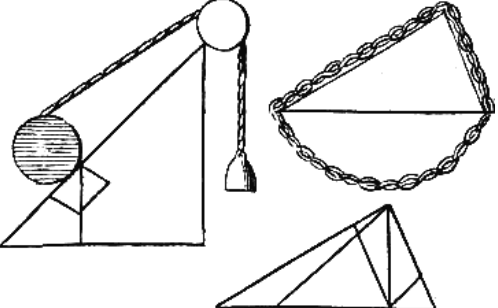


Name: _____

The Six Simple Machines

Directions: Correctly label the six simple machines.

- (1) inclined plane (3) pulley (5) wedge
(2) lever (4) screw (6) wheel and axle

<p style="text-align: center;">screw</p> 	<p style="text-align: center;">pulley</p> 
<p style="text-align: center;">wheel and axle</p> 	<p style="text-align: center;">wedge</p> 
<p style="text-align: center;">inclined plane</p> 	<p style="text-align: center;">lever</p> 